

# Flashback 4

Each day ask your child the set of questions and ask them to record the question and their workings in their book. The answers are in red so don't let your child see them until the end of each day to check their answers.

- 1) Amir and Ron share the strawberries equally.  
How many will they each have?



4

- 2) Double 6 is 12




- 3) There are 3 groups of 2 flowers.



- 4)  $5 + 8 = 13$

1) Dora, Alex and Annie share the cookies equally.

How many will they each have?



2

2) Double 5 is 10

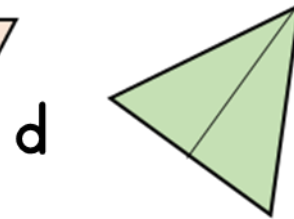
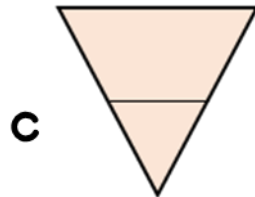
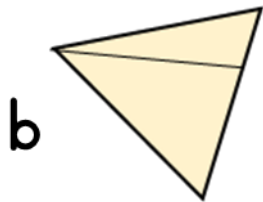
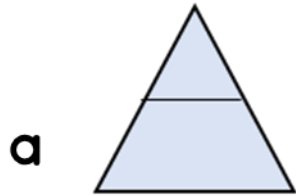

3) There are 3 groups of 10 cakes.

How many cakes altogether? 30



4) 1 less than 18 is 17

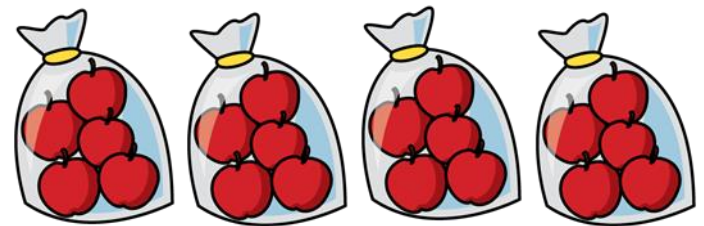
1) Which shape has been split in half?



2) Double 4 is 8

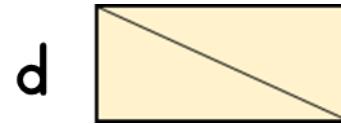




3) How many apples are there? 20



4) 2 more than 15 is 17

1) Which shape has not been split in half? **c**




2) I plant 2 flowers in each pot.  
How many pots can I fill?



**3**

3) Draw 3 plates. Draw 2 cookies on each plate.



4) 2 less than 15 is 13




- 1) Mo gives half of the sweets to Jack.  
How many does he have left?



4

- 2) The children get into teams of 3.  
How many teams will there be?



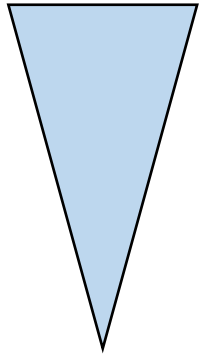
2

- 3) Draw 2 pots. Draw 5 pencils in each pot.


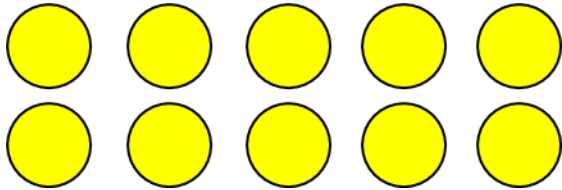


- 4) Find 3 more than 6

9



1) Draw half of the counters.



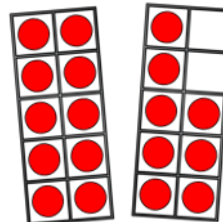
2) 9 strawberries are shared equally onto the plates.  
How many will be on each plate?



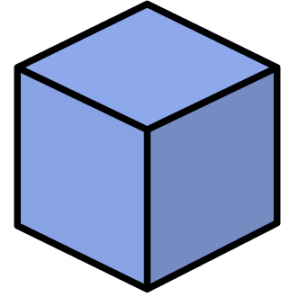
3

3)  $5 + 5 + 5 + 5 = 20$

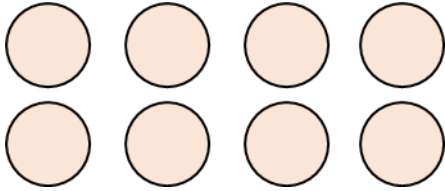
4) What number is shown?



18

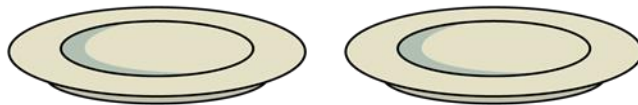


1) What is half of 8?



4

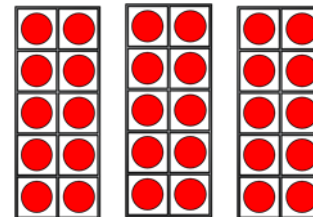
2) 4 cookies are shared equally onto the plates.  
How many will be on each plate?



2

3)  $2 + 2 + 2 =$  6

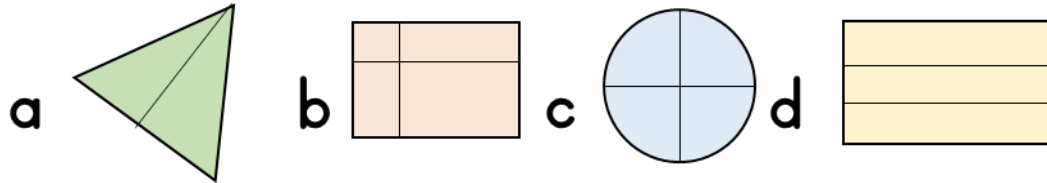
4) How many counters are there?




30



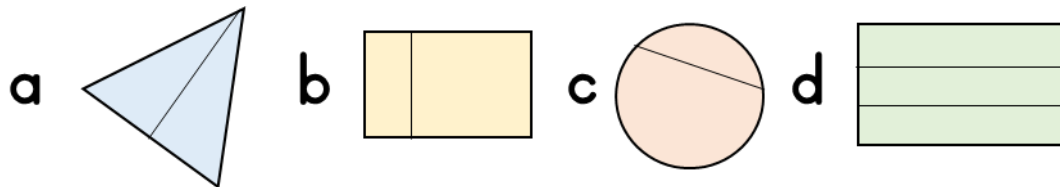
1) Which shape is split into quarters?



c



2) Which shape is split in half?



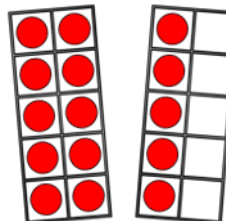
a

3) What is the total score?



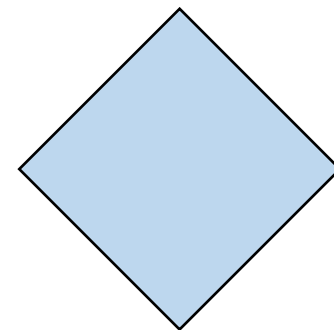


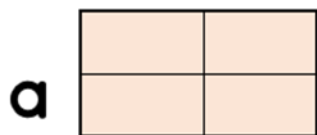
15

4) What number is shown?



15

1) Which shape is **not** split into quarters? **c**

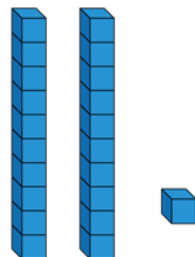



2) What is half of 12? **6**

3) What is the total score? **8**


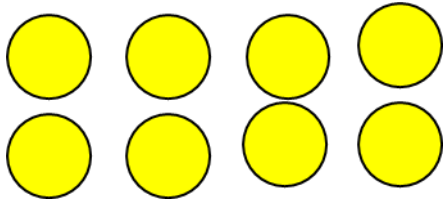


4) What number is shown? **21**






1) Draw a quarter of the counters.



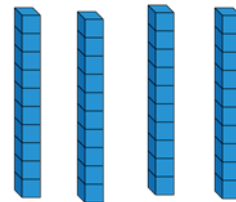
2) What is half of 16? 8

3) How many fingers?



30

4) What number is shown?



40